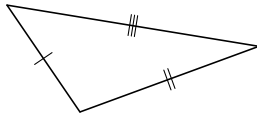
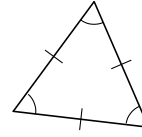


## Pauta - Clasificación de triángulos A

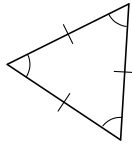
Clasifique los siguientes triángulos según la medida de sus lados.



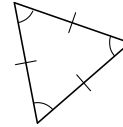
escaleno



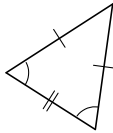
equilátero



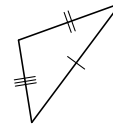
equilátero



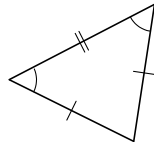
equilátero



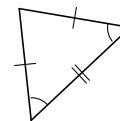
isósceles



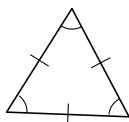
escaleno



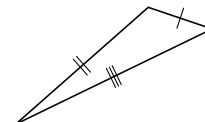
isósceles



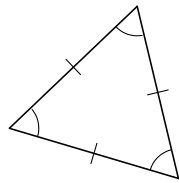
isósceles



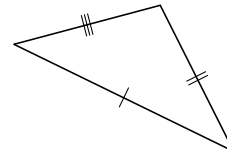
equilátero



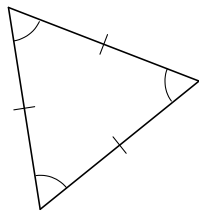
escaleno



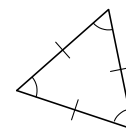
equilátero



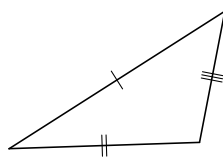
escaleno



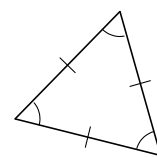
equilátero



equilátero



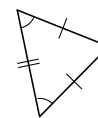
escaleno



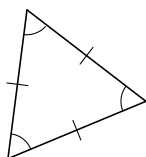
equilátero



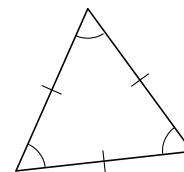
isósceles



isósceles



equilátero



equilátero