

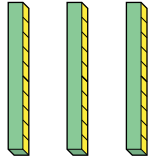

DÍA 1: SOLUCIONARIO

1.



Paso 1:

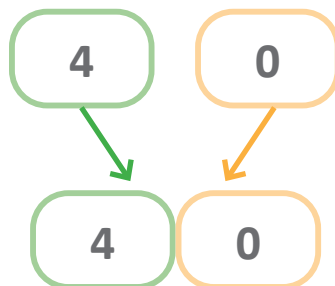
$$30 + 10$$

Paso 2:

Decenas	Unidades
	
	

Paso 3:

Decenas	Unidades
	
	



Paso 4: Entonces, $30 + 10 = 40$.

2. c)

3. b)

DÍA 2: SOLUCIONARIO

1.

Paso 1:

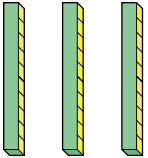
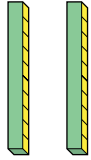
$$30 + 20$$

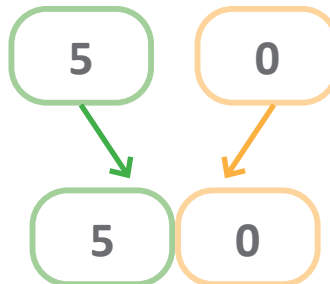
3 decenas + 2 decenas

Paso 2: 5 decenas.

Paso 3: $30 + 20 = 50$

Verificamos.

Decenas	Unidades
	
	



2.

b) $20 + 10 = 30$

c) $10 + 80 = 90$

d) $30 + 40 = 70$

3. b)




4. c)

DÍA 3: SOLUCIONARIO




1.

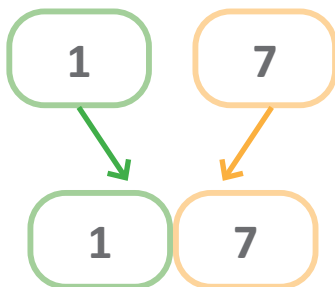
Paso 1: $12 + 5$

Paso 2:

Decenas	Unidades
	
	

Paso 3:

Decenas	Unidades
	
	



Paso 4: Entonces, $12 + 5 = 17$

2. c)

3. a)

DÍA 4: SOLUCIONARIO

1.

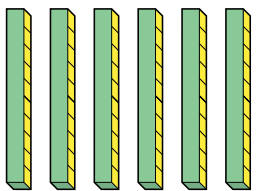
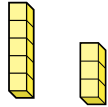
Paso 1: $63 + 5$

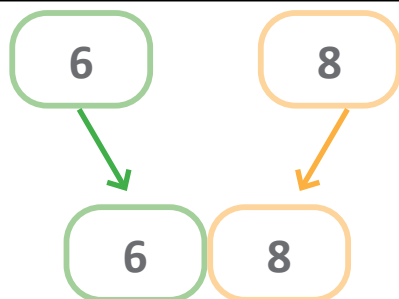
3 unidades + 5 unidades

Paso 2: 8 unidades.

Paso 3: 6 decenas y 8 unidades.

Verificamos.

Decenas	Unidades
	



2.

b) $7 + 62 = 69$

c) $63 + 4 = 67$

d) $36 + 2 = 38$

e) $25 + 4 = 29$

f) $5 + 72 = 77$

3. a)

4. c)

EVALUACIÓN SEMANAL SOLUCIONARIO

1. c)

2. b)

3. a)

4. c)