

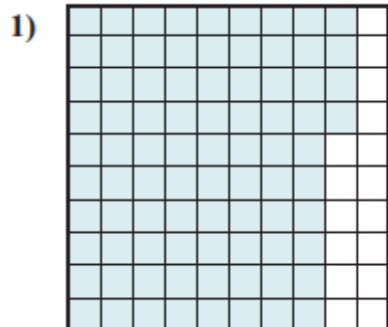
nombre _____

curso _____

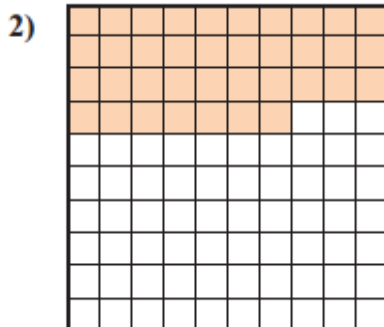
fecha _____

ACTIVIDADES: DETERMINAR DÉCIMOS Y CENTÉSIMOS


Encierre en un círculo o marque con rojo, el decimal que corresponde a cada imagen:



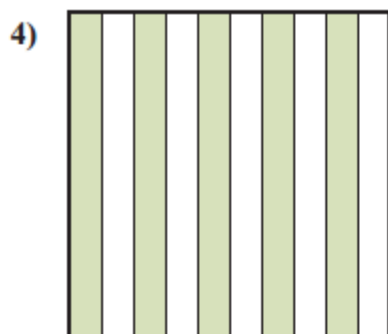
- A. 0,84
B. 0,0084
C. 0,084
D. 84,00



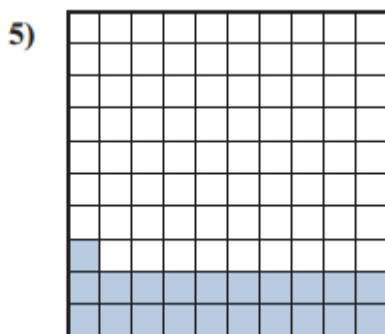
- A. 0,037
B. 0,37
C. 0,0037
D. 37,00



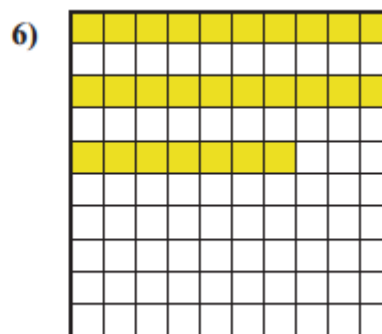
- A. 0,06
B. 60,00
C. 0,6
D. 6,0



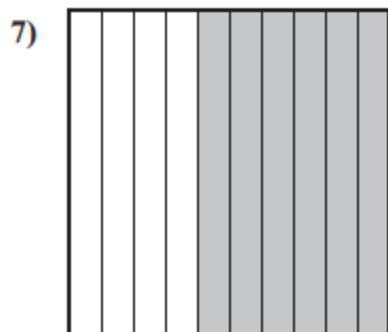
- A. 0,5
B. 5,0
C. 0,05
D. 50,00



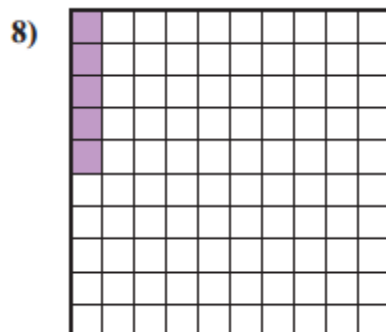
- A. 0,021
B. 21,00
C. 0,0021
D. 0,21



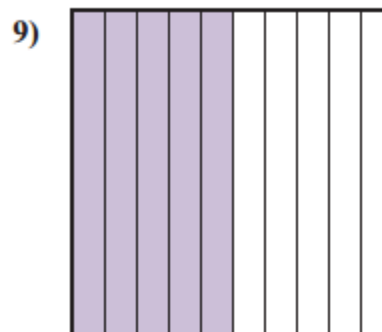
- A. 0,27
B. 27
C. 0,0027
D. 0,027



- A. 0,06
B. 0,6
C. 6,0
D. 60,00



- A. 0,5
B. 5,0
C. 0,005
D. 0,05



- A. 0,05
B. 0,5
C. 50,00
D. 5,0